

Segment Addition Practice in Pairs

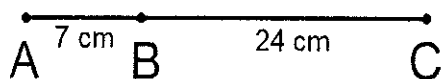
For this worksheet you will work with a partner. The younger partner will complete the problems in column A, the older partner will complete the problems in column B. While the problems are different your answers are the same. If your answers do not match up discuss with your partner and help each other find the mistake.

Column A

Answer

Column B

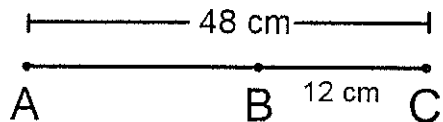
1) Find AC



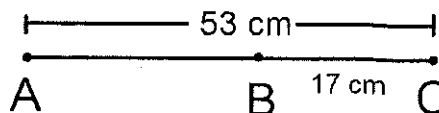
1) Find AC



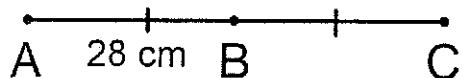
2) Find AB



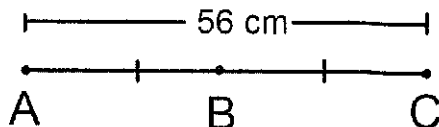
2) Find AB



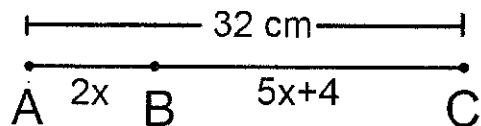
3) Find BC



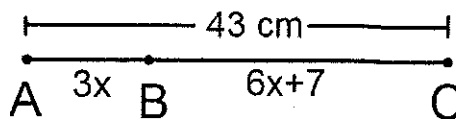
3) Find BC



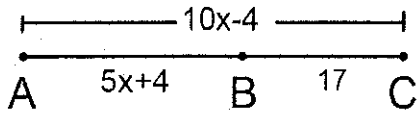
4) Find the value of x



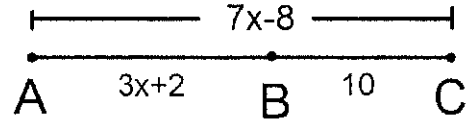
4) Find the value of x



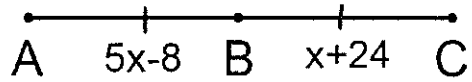
5) Find the value of x



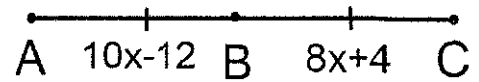
5) Find the value of x



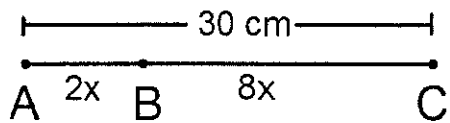
6) Find the value of x



6) Find the value of x



7) Find AB



7) Find AB

